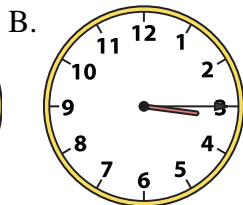
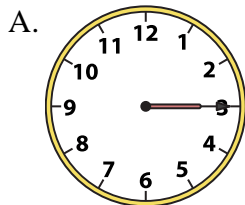




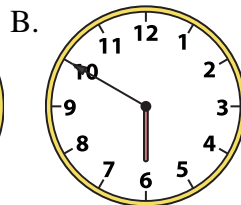
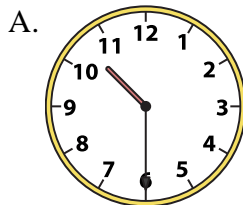
Determine which clock accurately shows the time.

Answers

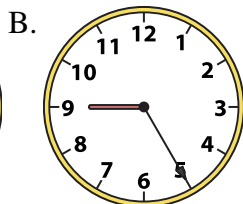
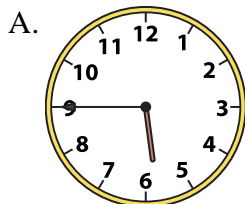
1) 3:15



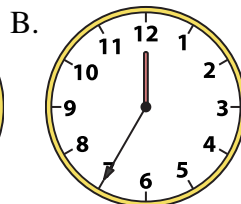
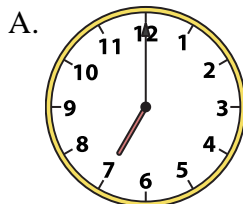
2) 10:30




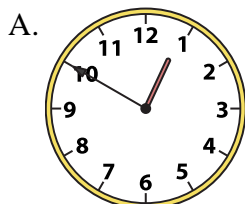
3) 5:45



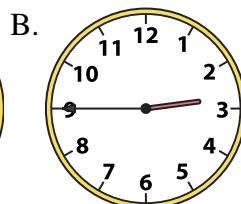
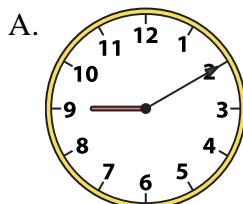
4) 7:00




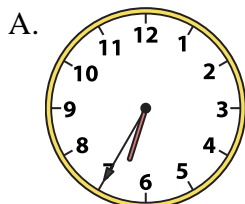
5) 10:00



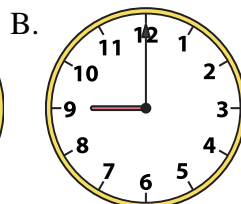
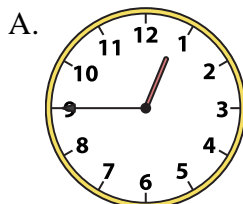
6) 2:45





7) 7:30



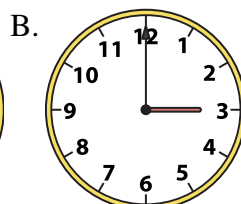
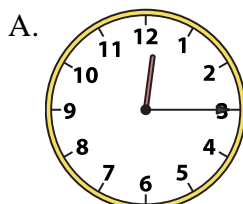
8) 9:00





9) 1:45





10) 12:15





11) 11:00





12) 1:45



13) 8:15



14) 2:00




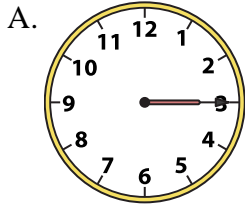
1. _____
2. _____
3. _____
4. _____
5. _____
6. _____
7. _____
8. _____
9. _____
10. _____
11. _____
12. _____
13. _____
14. _____
15. _____
16. _____



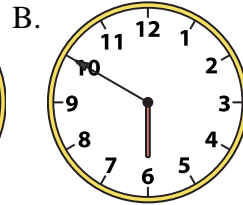
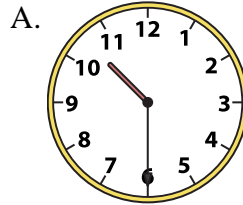
Determine which clock accurately shows the time.

Answers

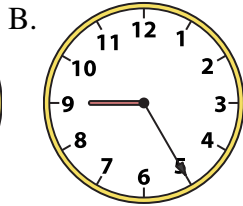
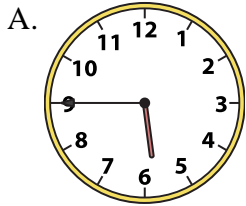
1) 3:15



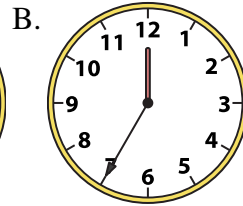
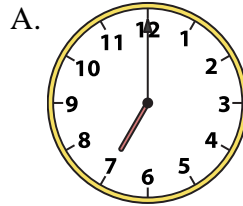
2) 10:30




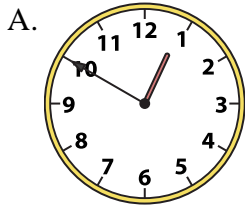
3) 5:45



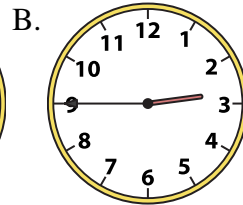
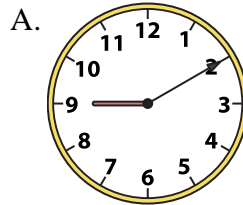
4) 7:00




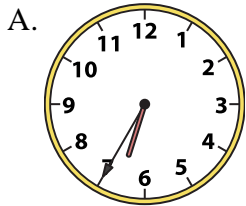
5) 10:00



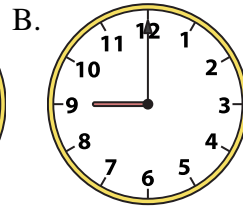
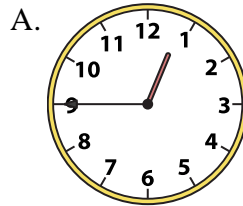
6) 2:45




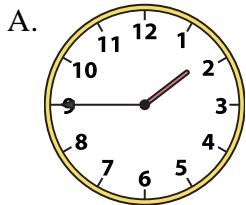
7) 7:30



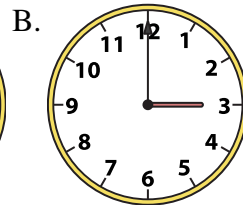
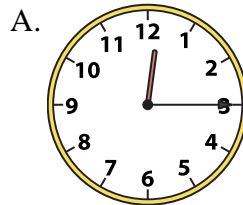
8) 9:00




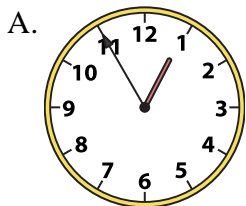
9) 1:45



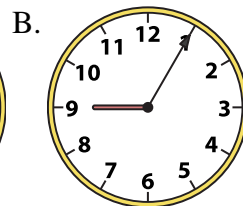
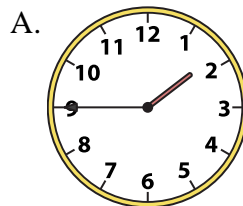
10) 12:15




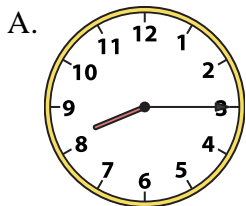
11) 11:00



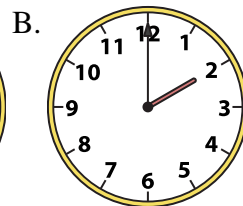
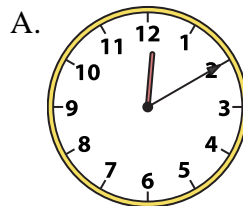
12) 1:45



13) 8:15



14) 2:00



- 1. **B**
- 2. **A**
- 3. **A**
- 4. **A**
- 5. **B**
- 6. **B**
- 7. **B**
- 8. **B**
- 9. **A**
- 10. **A**
- 11. **B**
- 12. **A**
- 13. **A**
- 14. **B**
- 15. **B**
- 16. **B**